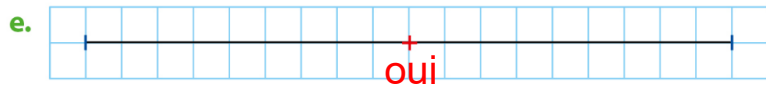
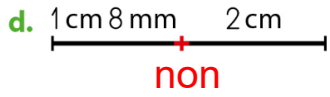
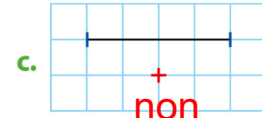
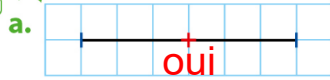
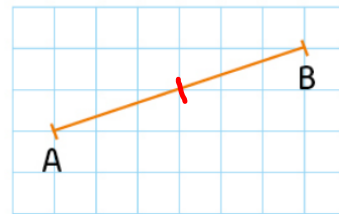
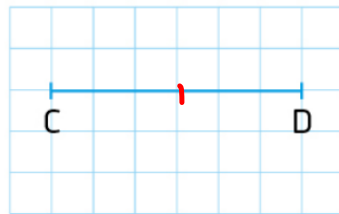
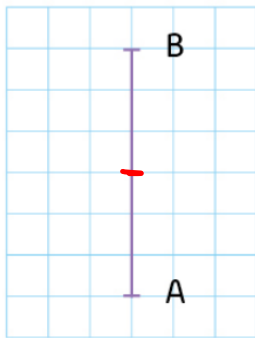


1  Dis si le point rouge est le milieu du segment noir.

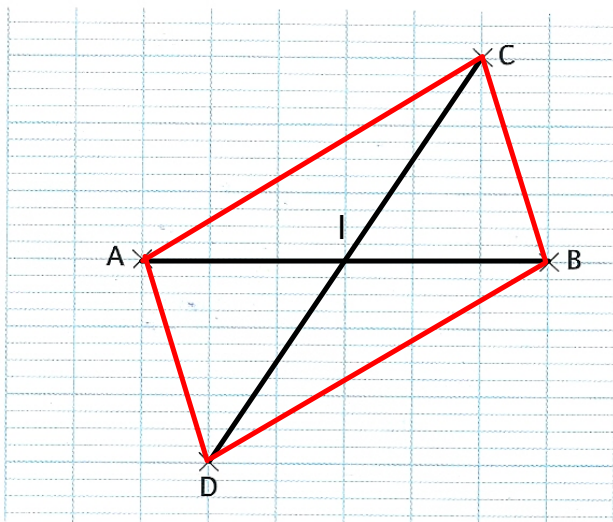


2  Trace ces segments sur ton cahier, puis indique le milieu de chaque segment avec un point rouge.



Attention à bien compter le nombre de carreaux.

Ex 8 p 125 livre de maths



c)  $AI = IB$

$CI = ID$

Le point I est le milieu du segment [AB] et le milieu de segment [CD]

d)  $AC = BD = 47 \text{ mm}$

$BC = AD = 25 \text{ mm}$

( à 1 mm près... )